

## SUMMER HOLIDAYS HOMEWORK


### GRADE 2 – ENGLISH

1. Stick and label 3 pictures of small and big things in your notebook .
2. Stick and label 3 pictures each of Proper and Common Noun in your notebook.
3. Stick and label 3 pictures of one and more than one in your notebook.
4. Stick and label 3 pictures each of Male and Female gender in your notebook.

<https://whatistheurl.com> Name : \_\_\_\_\_

## Caterpillars

Caterpillars eat leaves. They have a soft body. They have pine on their body. They breathe through little holes on the sides of their body. They have many friends and they love to play with them.



1) What does Caterpillars eat?

- a) chocolate    b) leaves    c) fruits

2) Who has a soft body?

- a) deer    b) cat    c) caterpillar

3) Caterpillars have \_\_\_\_\_ on their body.

- a) spike    b) pine    c) horn

4) Caterpillars breathe through \_\_\_\_\_.

- a) holes    b) heart    c) lungs

<https://whatistheurl.com>

Please visit our site for worksheets and charts <https://whatistheurl.com/>

5. Take a print out of the above two and do it.

<https://whatistheurl.com>

Name : \_\_\_\_\_

Hello friends, My name is Noah. I am 10 years old. I am from New York. I live in an apartment with my parents. I like playing football.



**Q. Answer the following.**

- 1) My name is \_\_\_\_\_.  
(a) Lisa (b) Noah (c) John
- 2) I am \_\_\_\_\_ years old.  
(a) 8 (b) 9 (c) 10
- 3) I live in an apartment with my \_\_\_\_\_.  
(a) parents (b) friends (c) cousins
- 4) I like playing \_\_\_\_\_.  
(a) chess (b) basketball (c) football

<https://whatistheurl.com>

Please visit our site for worksheets and charts <https://whatistheurl.com/>

ISLCollective.com

6. Draw and colour the picture of a house in your notebook.





**Delhi Public School**  
Hajipur

**Grade- 2**

**Subject - EVS**

## **SUMMER VACATION HOLIDAY HOMEWORK**

1. Take an empty bottle\ unused plastic box or scrap utensil and plant any available plant in it. Name your plant and take a very good care of it. See your plant growing with you.
2. Cut the picture of healthy food and unhealthy food and paste on the chart paper and write the name.
3. For Improving your handwriting write one page cursive handwriting daily (for 10 days).



**Delhi Public School**  
Hajipur

**Summer Holiday Home work**

**Date-14/05/2022**

**subject- Hindi**

**Grade-2**

1. प्यारे बच्चों इस अवकाश में आप अपने माता- पिता के साथ किसी भी museum or monument घूमने जाएं और उससे आपने क्या सीखा और कौन सी वस्तु आपको अच्छी लगी, घर आकर अपने माता पिता की सहायता से अपनी हिंदी कापी में एक लेख लिखें॥



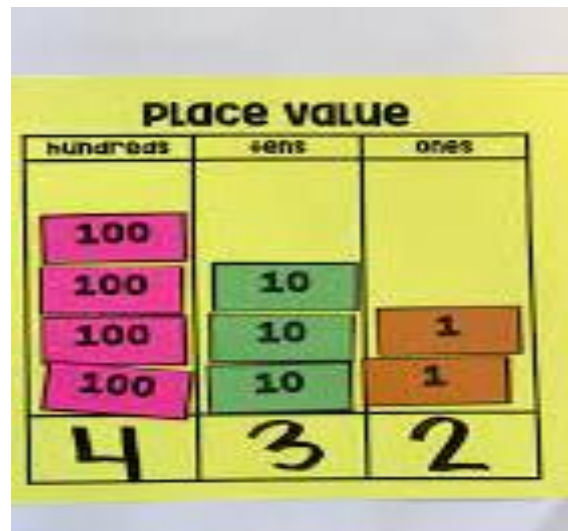

## SUMMER BREAK HOLIDAY HOME WORK

CLASS: II

SUBJECT: MATHS

DATE: 15.05.2022

**Activity 1:** Make a poster to show the place value of 3-digits number. You can put any 3 digits number.



**Activity 2: CRAFT:** Make a model of Even and Odd Street display on chart paper. Colour it as shown below.

EVEN

and



Street





**Activity 3: Write the ordinal numbers according to the position of the vehicles.**

**Ordinal Numbers - Traffic Jam**

Fill in the squares:

4<sup>th</sup> 3<sup>rd</sup> 8<sup>th</sup> 7<sup>th</sup> 10<sup>th</sup> 2<sup>nd</sup> 5<sup>th</sup> 9<sup>th</sup> 6<sup>th</sup>

1. The bus is in \_\_\_\_\_ position.
2. The ambulance is in \_\_\_\_\_ position.
3. The tractor is in \_\_\_\_\_ position.
4. 8<sup>TH</sup> in line is the \_\_\_\_\_
5. 4<sup>th</sup> in line is the \_\_\_\_\_
6. Second in line is the \_\_\_\_\_

### Activity 4: Mental Maths.

1) Write the number that is 100 more than 185.

Ans: \_\_\_\_\_

2) How many tens make 1 hundred?

Ans: \_\_\_\_\_

3) What must be added to 75 to get 100?

Ans: \_\_\_\_\_

4) If today is 1<sup>st</sup> June, then yesterday was?

Ans: \_\_\_\_\_

5) A mobile cost ₹250. What will be the cost of 2 such mobiles?

Ans: \_\_\_\_\_

### Activity 5: Solve the given sums.

$24 + 13 = \square$

$57 - 22 = \square$

$72 - 11 = \square$

$33 - 11 = \square$

$35 + 24 = \square$

$71 + 19 = \square$

**Activity 6: Complete the given multiplication table:**

$3 \times 8 = \square$

$9 \times 3 = \square$

$4 \times 2 = \square$

$5 \times 3 = \square$

$6 \times 2 = \square$

$8 \times 4 = \square$

$7 \times 3 = \square$

**GENERAL INSTRUCTIONS:**

- 1. You are instructed to finish all these activities and keep the activity work in a separate file / folder for submission. Within the summer vacation.**
- 2. Keep the digital evidences (photograph) with you.**

**WISH YOU A HAPPY AND SAFE SUMMER VACATION**

